

SNARE DRUM SCQF LEVEL 3

Time Allowed — 1 Hour

1 (a) Why is the Treble Clef also known as the G Clef?

/1

(b) Correctly draw a staff in the space below to include:

(i) treble clef

(ii) 4 equal bars (in width)

(iii) the correct use of a repeat sign.


/4

2 (a) Give an example of a simple time, time signature and explain it's meaning.

/3

(b) Name the Pitch of the notes written on the staff below.

Write the letter (pitch) in the box below each note.



<input type="text"/>	<input type="text"/>	<input type="text"/>	<input type="text"/>
----------------------	----------------------	----------------------	----------------------

/2

3 (a) Complete the note value table below showing the relative note values.

The first one has been done for you.

Note	Note Name	Note Value
○	Semibreve	Whole Note (or) 1

/5

(b) How many minims (1/2 note) are there in the whole note?

/1

(c) How many crotchets (1/4 note) are there in a minim?

/1

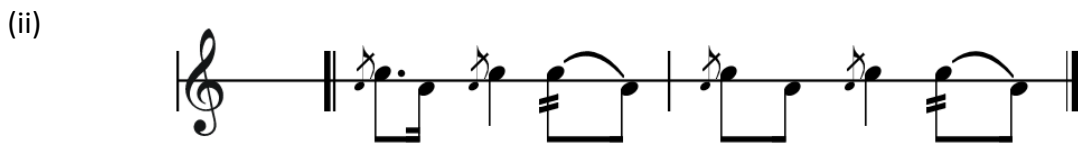
4 Look at the two notes given below.



When a tail is added to a note, what effect does it have on the duration of the note?

/2

5 (a) On the following bars of music write on the correct time signature for each.



/2

(b) On the following section of music correctly place the bar lines according to the time signature given.




/4

6 On the staves below, write the named movements.

(i) Left handed flam



(ii) Right handed drag



(iii) Paradiddle starting on the right



(iv) Triplet starting on the left



/8

7 On the staff below, write a monotone rhythm according to the time signature shown.

Each bar must demonstrate different notes or note groups.



/8

8 Look at the following staves.

Circle the correct written notation for each movement that is stated.

(i) Right handed flam



(ii) Left handed 7 stroke roll



(iii) Right handed paradiddle

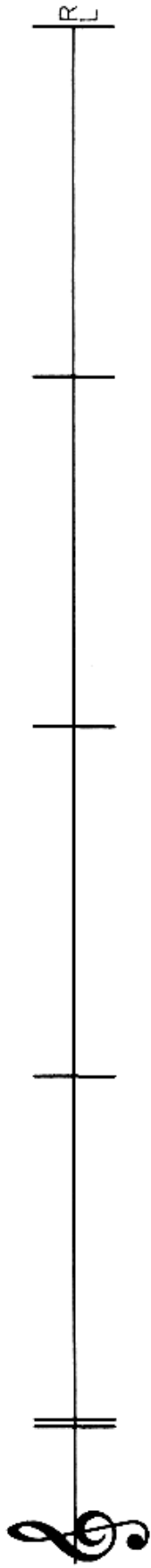


9 On the staff below write out the first 8 bars of a simple time tune from memory that you played (will play) in your solo performance.

Remember to include the tune name, style, time signature and correct musical notation including repeats where necessary.

Name of tune _____

Style of tune _____



/16

TOTAL /60